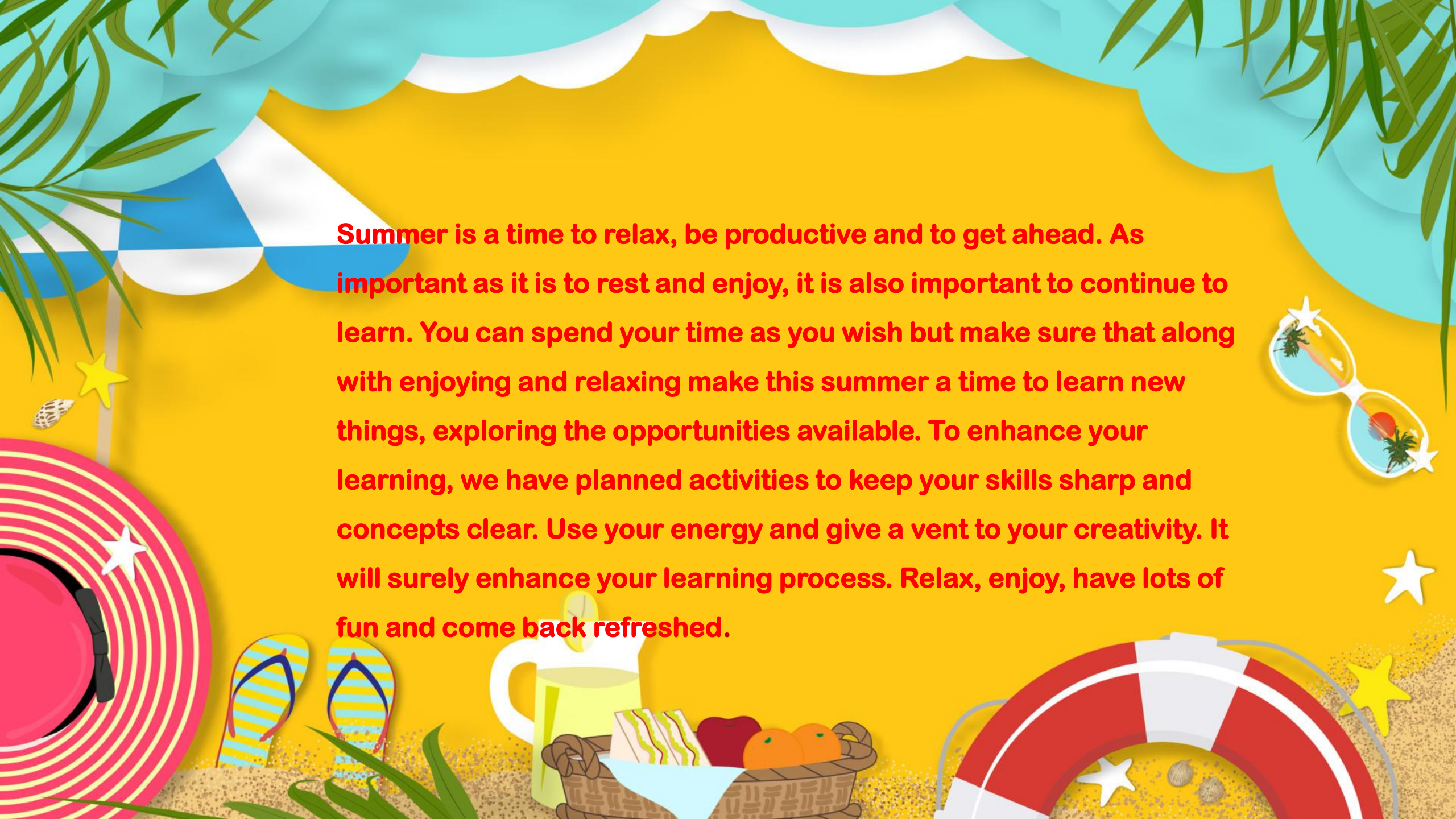




JAIN HAPPY SCHOOL
(A MINORITY EDUCATIONAL INSTITUTION)
SESSION – 2025-26
SUMMER HOLIDAYS HOMEWORK
CLASS –III



A vibrant summer beach scene illustration. At the top, a blue and white striped beach umbrella is partially visible. The background is a bright yellow sun. In the center, a paragraph of red text is displayed. To the right of the text, a pair of white sunglasses with a tropical design is shown. At the bottom left, a pink and white striped beach hat with a white star is visible. Next to it are a pair of blue and yellow striped flip-flops. In the bottom center, there is a white pitcher of lemonade and a wicker basket filled with sandwiches, an apple, and oranges. At the bottom right, a red and white striped lifebuoy is shown. The entire scene is decorated with green palm fronds, yellow stars, and a sandy beach texture at the bottom.

Summer is a time to relax, be productive and to get ahead. As important as it is to rest and enjoy, it is also important to continue to learn. You can spend your time as you wish but make sure that along with enjoying and relaxing make this summer a time to learn new things, exploring the opportunities available. To enhance your learning, we have planned activities to keep your skills sharp and concepts clear. Use your energy and give a vent to your creativity. It will surely enhance your learning process. Relax, enjoy, have lots of fun and come back refreshed.



GUIDELINES

1. Do all the work on A-3 size sheets.
2. Make a separate folder for holiday homework and submit it when the school reopens.
3. Do project work according to your roll no. Use your own innovative ideas for model/project work.
4. Do the work neatly as per the given instructions.
5. Enjoy the activities so that the work becomes fun.
6. Creativity and originality of the work will be appreciated.

हिन्दी

1. कक्षा में किए गए कार्य को दोहराएं एवं याद करें।
2. पर्यायवाची शब्दों पर चित्रों सहित सुंदर सा प्रोजेक्ट बनाएं। (रोल नंबर 1 से 3)
3. एकवचन बहुवचन पर चित्रों सहित सुंदर सा प्रोजेक्ट बनाएं।
(रोल नंबर 4 से 6)



निम्नलिखित शब्दों के लिंग बदलो।

- क) शेर
- ख) हंस
- ग) मोर
- घ) चोर
- ङ) भाई
- च) घोड़ा
- छ) बकरा
- ज) तोता
- झ) माता
- ट) लड़का

उचित संज्ञा शब्द चुनकर खाली जगह में लिखिए ।

गाड़ी

पक्षी

मिठाई

हरियाली

घड़ी

साड़ी

मोर

जंगल

पिटाई

दादी

- (1) पेड़ पर _____ चहचहा रहे हैं ।
- (2) पेड़ - पौधों से _____ छा जाती है ।
- (3) _____ के पंख बहुत सुंदर होते हैं ।
- (4) मेज़ पर _____ रखी है ।
- (5) मुझे _____ अच्छी लगती है ।
- (6) माँ ने आज लाल रंग की _____ पहनी है।

नीचे दिए गए गद्यांश को पढ़कर प्रश्नों के उत्तर लिखिए ।

गरमी का दिन था । एक पेड़ की छाया में दो व्यक्ति बैठे हुए आपस में बातचीत कर रहे थे उनमें से एक ने कहा, "यदि वृक्ष नहीं होते तो हमारा जीवन भी नहीं होता ।" दूसरे ने कहा, "इसीलिए तो प्राचीन काल के लोग देवता की तरह वृक्षों की पूजा करते थे ।" प्राचीन संस्कृति की स्थापना वृक्षों तले हुई है । वृक्ष पानी बरसाने में बहुत ही सहायक हैं । जिसके कारण खेती का सिंचन होता है । बिना पानी खेती हो ही नहीं सकती । वृक्षों को काटने से प्रलयकारी बाढ़ आती है । जिसके कारण काफी लोगों के घर टूट जाते हैं और काफी लोग मर भी जाते हैं । वृक्षों से हम मेज, कुर्सी, पेंसिल, कागज, बक्से, डिब्बे खिलौने, मूर्तियाँ आदि बना सकते हैं । हमें यह बात हमेशा ध्यान रखनी चाहिए कि जब हम एक पेड़ काटें तो उस के स्थान पर पाँच पेड़ लगाएँ ।

प्रश्न १. पेड़ की छाया में दो व्यक्ति बैठे हुए क्या कर रहे थे ?


.....
.....

प्रश्न २. प्राचीन संस्कृति की स्थापना कहाँ हुई है ?

.....
.....

PRESENT

don't




ENGLISH

1. **Revise and learn all the work done in class.**
2. **Make a beautiful project on adjectives with pictures.(Roll no. 7 to 9)**



3. **Make a beautiful project on genders with pictures.**
(Roll no. 10 to 12)



what?



Hi!



Adjectives

Fill in the blanks with the most suitable adjectives.

quiet	funny	narrow	spicy	clean
cold	colorful	sweet	tall	poisonous

The ice cream is _____.

The library is _____.

The door is too _____.

The floor is _____.

The clown is _____.

The red pepper is _____.

The tree is _____.

The rainbow is _____.

The snake is _____.

The brownie is too _____.



Verb to be Worksheet

Q. Complete the sentences with correct verb to be.

1. He _____ my favorite singer.

a) is b) are c) am

2. They _____ all members of our football club.

a) is b) are c) am

3. I _____ pleased to share it with you.

a) is b) are c) am

4. She _____ walking with her dad.

a) is b) are c) am

5. Oliver _____ pleased to share his experience.

a) is b) are c) am

6. They _____ watching TV.

a) is b) are c) am



Opposite Words

Read and match the opposite words.

day

in

boy

short

inside

soft

happy

dry

adult

fast

tall

hard

wet

night

slow


child

out

outside

girl

sad

The background is a vibrant orange and yellow gradient with various mathematical symbols scattered throughout. Symbols include plus signs, minus signs, multiplication signs, division signs, and percentages, all rendered in a 3D, glossy style. Some symbols are larger and more prominent, while others are smaller and fainter.

MATHS

1. Revise and learn all the work done in class.
 2. Make any five solid shapes of A-3 size sheets.
 3. Make a beautiful project on Fractions . (with your own innovative ideas)
- (Roll no. 13 to 18)


Order from smallest to greatest


Order each set of numbers from the smallest to the greatest.


- | | | | | | |
|----|-------|-------|-------|-------|-------|
| 1) | 3,908 | 2,098 | 1,554 | 9,233 | 4,456 |
| | _____ | _____ | _____ | _____ | _____ |
| 2) | 6,550 | 4,500 | 4,300 | 6,500 | 8,000 |
| | _____ | _____ | _____ | _____ | _____ |
| 3) | 2,123 | 2,141 | 2,413 | 2,213 | 2,441 |
| | _____ | _____ | _____ | _____ | _____ |
| 4) | 1,250 | 1,520 | 1,025 | 1,052 | 1,502 |
| | _____ | _____ | _____ | _____ | _____ |
| 5) | 1,234 | 1,324 | 1,423 | 1,432 | 1,342 |
| | _____ | _____ | _____ | _____ | _____ |
| 6) | 5,678 | 5,079 | 5,876 | 5,687 | 5,867 |
| | _____ | _____ | _____ | _____ | _____ |
| 7) | 3,567 | 3,654 | 3,547 | 3,764 | 3,655 |
| | _____ | _____ | _____ | _____ | _____ |

A. Write the numbers in words.


1) 7 8 6 6 


2) 2 2 2 2 


3) 9 0 0 3 


4) 3 7 1 2 

B. Write the numbers in their expanded form.

1) 5 6 7 8 

2) 9 9 2 3 

3) 5 6 1 1 

4) 2 0 3 4 

Q 1. Use the symbols greater than ">" or less than "<" or equal to "=".

480 408

776 767

812 643

990 917

835 740

603 603

341 314

561 567

521 347

500 700

852 751

105 105

Q 2. Write in ascending order.

231 , 469 , 860 , 629

135 , 318 , 440 , 587

412 , 127 , 421 , 128

798 , 666 , 615 , 738

396 , 666 , 951 , 723

____ , ____ , ____ , ____
____ , ____ , ____ , ____
____ , ____ , ____ , ____
____ , ____ , ____ , ____
____ , ____ , ____ , ____

Q 3. Write in descending order.

231 , 469 , 860 , 629

135 , 318 , 440 , 587

412 , 127 , 421 , 128

798 , 666 , 615 , 738

396 , 666 , 951 , 723

____ , ____ , ____ , ____
____ , ____ , ____ , ____
____ , ____ , ____ , ____
____ , ____ , ____ , ____
____ , ____ , ____ , ____



SCIENCE

- 1. Revise and learn all the work done in class.**
- 2. Make 2 cutouts each of herbivorous carnivorous and omnivorous animals of A-3 size.**
- 3. Grow a medicinal plant and bring it on the day when school reopens.
(Roll NO. 19 to 24)**

LIVING OR NON-LIVING ?

CHOOSE THE CORRECT OPTION

THEY EAT

LIVING

NON-LIVING

THEY DO NOT BREATHE

LIVING

NON-LIVING

THEY REPRODUCE

LIVING

NON-LIVING

THEY ARE BORN

LIVING

NON-LIVING

THEY DO NOT GROW

LIVING

NON-LIVING

THEY DO NOT EAT

LIVING

NON-LIVING

THEY BREATH

LIVING

NON-LIVING

THEY DO NOT MOVE

LIVING

NON-LIVING

THEY DIE

LIVING

NON-LIVING

Label the parts of the plant using the word bank.


root

flower

leaf

fruit

stem



SAFE Or NOT

Write YES, if the object is safe to touch. Otherwise, write NO.



NO





SOCIAL STUDIES-

Revise and learn all the work done in class.

Make five cutouts of national symbols of A3 size.

Make a colourful poster on A3 size sheet on clothes worn by people in different states of India.

(Roll no. 25 to 30)

A. Tick (✓) the right answer :

1. The biggest water body is _____.

- a. river b. lake c. ocean

2. We see the blue sky far above the _____.

- a. earth b. sun c. stars

3. _____ cause rain.

- a. Day b. Clouds c. Night

4. We live on _____ planet

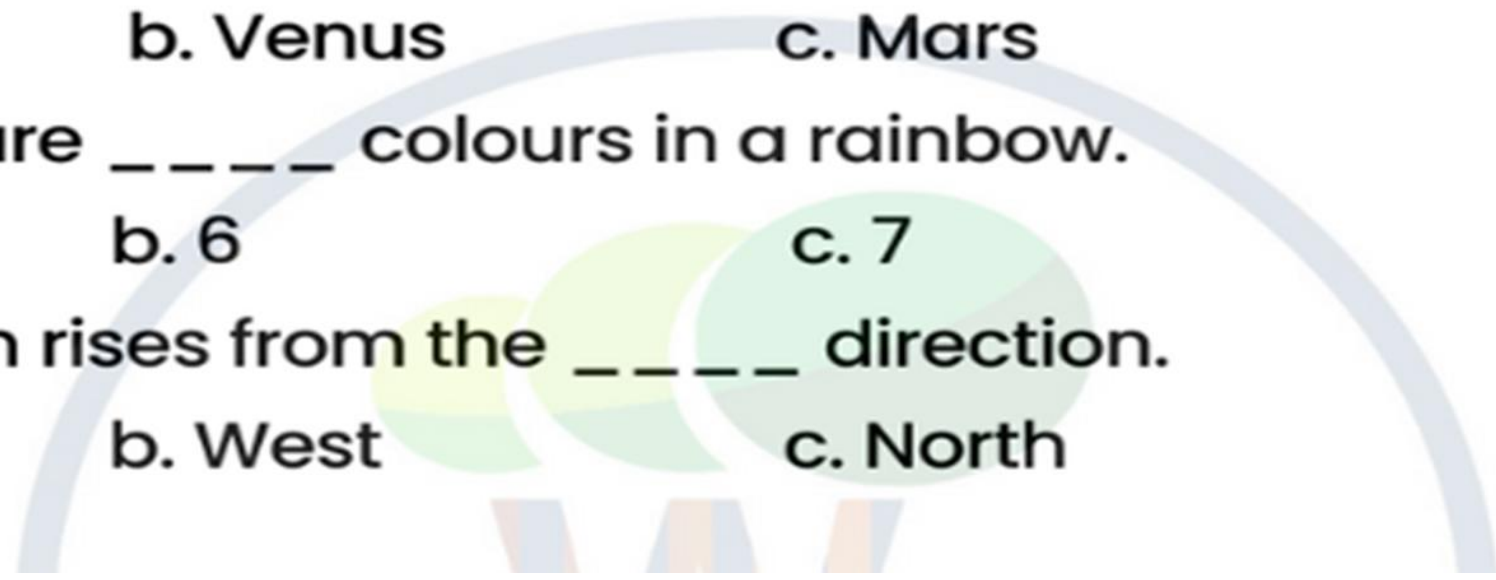
- a. Earth b. Venus c. Mars

5. There are _____ colours in a rainbow.

- a. 5 b. 6 c. 7

6. The sun rises from the _____ direction.

- a. East b. West c. North



Environment

Fill in the blanks with the correct answers, use words in the box to help you.

Air pollution

Water pollution

Land pollution

Noise pollution

1.



2.



3.



4.



5.



Put "True" if the sentence is true and put "False" if the sentence is false.

6. _____ **Noise pollution** is an unwanted sound that is harmful to people and animals.

7. _____ what causes **Air pollution**? Dirty water and oil from factories.

8. _____ people throw too much garbage everywhere on the ground causes **Land pollution**.

9. _____ throwing garbage into the river and sea causes **water pollution**.

10. _____ when our environment is nice and clean is called **Pollution**.

A. Identify the famous monuments of our country.



B. Fill in the blanks.

- a. India is the ____ largest country in the world.
(seventh/eighth)
- b. People of India are called _____. (Citizen/Indian)
- c. _____ is the capital of India. (New Delhi/Maharashtra)
- d. India has _____ states. (28/32)
- e. There are _____ Union Territories in our country. (7/8)



GENERAL KNOWLEDGE

Revise and learn all the work done in class.

Make a decorative item using waste material.

(Roll No. 31 to 38)

Choose the correct answers:-

1. It pumps blood to all parts of the body.

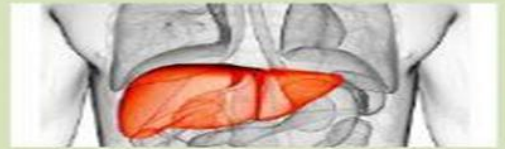


2. It is the largest bird .

It is flightless but it can run at a top speed of 70 km per hour.



3. It is the largest internal organ of the human body.



4. It is called koel in India .

Its voice is very sweet . It looks like a crow.



5. It has tusks , long whiskers and flat flippers.

It is found in the Arctic region.



Match the following



1. Christians pray at



2. Muslims pray at



3. Hindus worship
at a _____



4. The Buddhist
Monastery is called a

Mosque

Temple

Vihara

Church



COMPUTER

Class - III

1

**Write three lines and paste
colour picture of following parts
of computer**

- **4 Input Devices**
- **4 Output Devices**






ICT – Input and Output Devices – Hardware and Software – Uses of computer

Name: _____

Grade : _____

Date: _____

1. Complete the table:

	Name of the device	Input/Output
	_____	_____
	_____	_____
	_____	_____
	_____	_____
	_____	_____

2. Identify the hardware and the software and tick (✓) the correct column.

	Hardware	Software		Hardware	Software
					
					
					

HOLIDAY HOMEWORK – INDIAN MUSIC


CLASS 3

Paste pictures of 3 Indian musical instruments and label them.

Learn and *perform* a small bhajan or folk song.

Listen to an Indian classical music clip (Carnatic or Hindustani) and write 3 sentences about the experience.

Create a decorative chart showing 7 swaras (Sa Re Ga Ma Pa Dha Ni) with their colors or symbols.



Sitar



Flute



Flute



LIBRARY

Read and Draw

- Read any one storybook.
- Draw your favourite scene from the story and colour it.

INSTRUCTIONS:

- Use chart paper for making your favourite scene.
- Mention the name of the story on the top.
- Mention the name of the characters and moral



Art and Supw holiday h.w



**Class IIIA- make
this beautiful
craft with paper
cups**

**Class IIIB- make
this craft
owl with
newspaper
stripes**



**Art -Draw and paint
a beautiful fish
aquarium in A-3 size
sheet**



PHYSICAL EDUCATION HOLIDAY HOMEWORK

• **Classes I to III**

1. Fitness Fun chat

- **Task: Maintain a weekly fitness chart.**
-
- **Example: Write or draw 1 activity you did each day (like skipping, dancing, running, playing).**
- **Objective: Encourage daily physical activity.**
- **on your colourful scrap file**
- **Paste photo with your daily activity and explain that activity.**